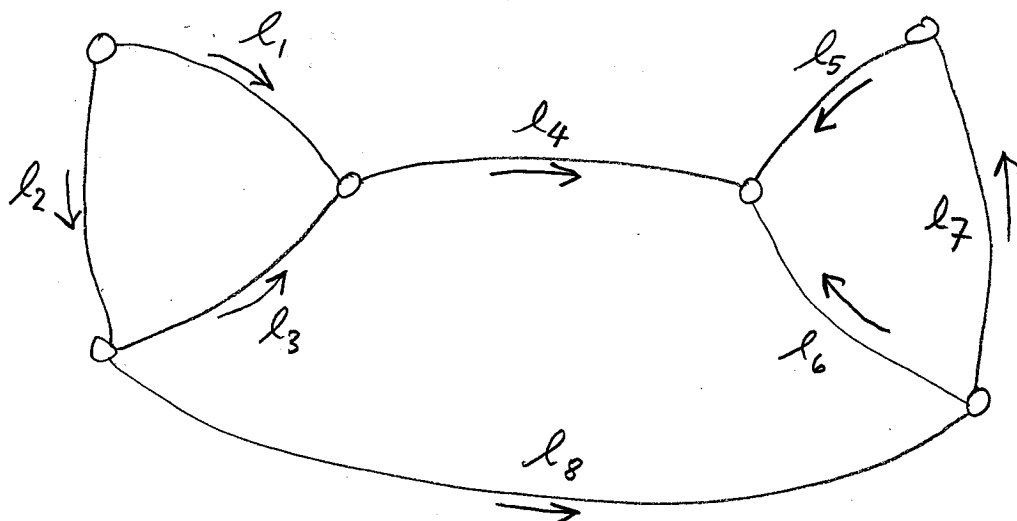


Adj. of Geospatial Obs. — Homework 3  
 assigned 7 Sept, 2012, due Monday, 17 Sept.

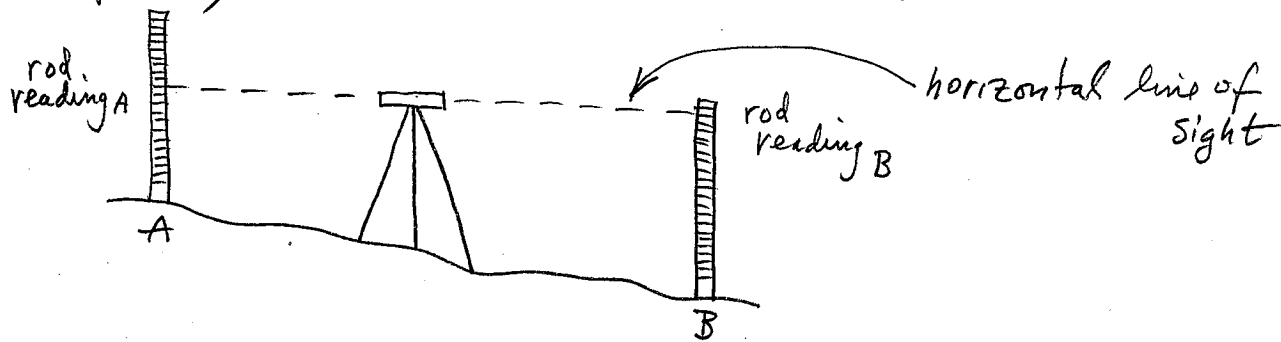
1/2

1. Adjust the observations in the level network by Least Squares, using the "observation only" method (pencil & paper). Arrows point up hill.



#	l	$\sigma$
1	16.11	.05
2	6.94	.05
3	9.03	.05
4	6.92	.05
5	5.25	.15
6	10.85	.15
7	6.10	.15
8	4.80	.15

Note: The observation  $l$  is an elevation difference between the two points, often measured with a "level"

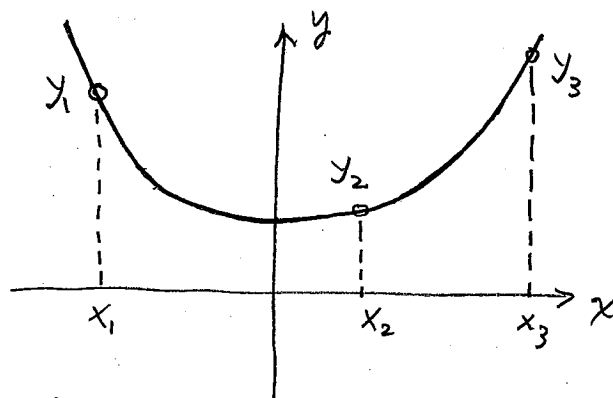


$$l = \text{rod reading}_B - \text{rod reading}_A$$

You can make the condition equations by summing around closed loops — the sum must be zero!  
 (with the arrow +, against the arrow -)

2. you observe the y-coordinates of three points on a curve of the form  $y = ax^2 + b$

2/2



the x-coordinates is a constant.

Find the condition equation(s) necessary to express this model using observations only (no parameters!).

Then solve the Least squares problem for the data

x	y
-2	11.15
1	4.97
3	20.92

using the observations only, pencil & paper method.

(hint: you can find the condition equation(s) by elimination.)